

HIMALAYA INTERNATIONAL SCHOOL

HOLIDAY HOMEWORK

ENGLISH

CLASS VI

Note: All the questions need to be done in English language notebook.

Q1. Draw flow charts on the following topics.

- a) Different types of nouns
- b) Phrases and Clauses
- c) Kinds of sentences
- d) Various kinds of Adjectives

Q2. Write a short speech on any topic and practice delivering it to your family during vacations, and present it before the class after the holidays.

Q3. Imagine you are Alexa and it is your first day with a new family. Write your experience in a paragraph in about 100 words.

Q4. Visit any one historical monument in Delhi and write about your experience in 120 words in the form of a short paragraph. You can paste a picture to support it.

Q5. Frame an interesting conversation between you and your friend on favourite picnic spot in Delhi .

Q6. Your school is organizing a summer camp during summer vacation from May 19th to June 5th for classes VI to VIII. As the head of the student's council, frame a notice and provide the necessary details.

विषय- हिन्दी

निर्देश-कार्य साफ एवं सुन्दर लेख में करें।

1. पर्वत भ्रमण को बढ़ावा देने हेतु A-3 शीट पर निमंत्रण पत्र तैयार करें।
2. स्वर संधि की परिभाषा, भेद व दो-दो उदाहरण लिखकर सुन्दर चार्ट बनाएं।
3. 'मेरे जीवन का लक्ष्य' विषय पर 100 शब्दों में अनुच्छेद कापी में लिखिए।
4. 5 मुहावरे एवं 5 लोकोक्तियां काँपी में लिखकर वाक्य निर्माण करें।
5. महंगाई विषय पर दो मित्रों का संवाद लिखिए।
6. छुट्टी लेने के लिए प्रधानाचार्य को पत्र लिखिए ।

विषय: - संस्कृत

1. वर्णानां वर्गीकरण कृत्वा वर्णपुस्तिकायाः निर्माणं कुरुत ।
2. बालक,जल शब्दरूपं उत्तरपुस्तिकायाः लिखित्वा स्मरणं कुरुत।

3. पठ् धातुः (लट्, लूट्, लड् लकारः) उत्तरपुस्तिकायाः लिखित्वा स्मरणं कुरुत।
4. वर्ण-संयोजनः, वर्ण-विच्छेदः दश उदाहरणानि उत्तरपुस्तिकायाः लिखत ।
5. 1-10 संख्यानाम् सचित्रम् चार्ट निर्माणं कुरुत ।
6. पूर्व-अर्धवार्षिक-परीक्षायाः पाठ्यक्रमस्य पुनरावृत्ति कुरुत ।

Mathematics

Note:- Do the Holiday Homework in separate notebook.

I. Practice Assignment:

Q1. Write the number name for numeral '305081' according to the Indian system of numeration. Also , write its expanded form.

Q2. Round off the number 1348 to the nearest ten and also to the nearest hundred.

Q3. How many crores make 100 million?

Q4. Express $(97 + 79)$ as a Roman numeral.

Q5. Write the corresponding numeral for the expansion $5 \times 100000 + 7 \times 1000 + 4 \times 10 + 8$. Also, write the number name in the International system of numeration.

Q6. Solve the following.

$$XCIX + XCII + XL + XV$$

Q7. Which is greater: 7432931 or 7432193?

Q8. Find the sum by the suitable rearrangement.

$$437 + 3746 + 563 + 1254$$

Q9. Find the product by using the suitable property: 1891×99

Q10. Find the whole number a, when

$$(a) a - 19 = 51 \quad (b) a + 1432 = 7320$$

Q11. Observe the following pattern and write the next two steps.

$$1 + 3 = 2 \times 2 = 4$$

$$1 + 3 + 5 = 3 \times 3 = 9$$

$$1 + 3 + 5 + 7 = 4 \times 4 = 16$$

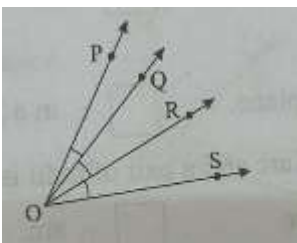
Q12. Divide 61304 by 148 and check the result by division algorithm.

Q13. Evaluate the following using the number line.

$$(a) 5 + 4 \quad (b) 3 \times 4$$

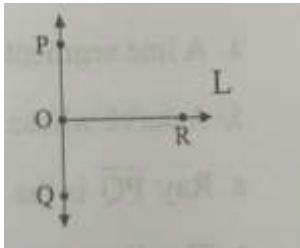
Q14. 105 workers in a factory are paid a total salary of ₹ 823725 every month. If all the workers get the same amount , find the salary of each worker.

Q15. Write the names of all the angles in the given figure.

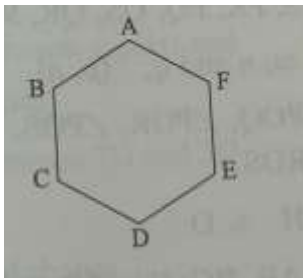


Q16. Draw a triangle ABC . Mark (a) points P, Q, R and S inside the triangles; (b) points M, N and O outside the triangle and (c) points K and L on the triangle.

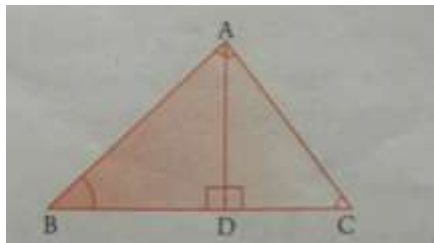
Q17. In the given figure , write the names of all the line segments, rays and lines.




Q18. In the given hexagon , how many vertices and sides are there? Also , write their names.



Q19. (a) Identify all the triangles in figure.
(b) Which two triangles have $\angle B$ as common in the figure ? Name them.



Q20. Identify the following figures as 'open' or 'closed' curve.



II. Make a project on parts of circle on A4 or A3 size sheet. Use origami papers to present it in a innovative way.

III. Learn and Write tables from 2 to 20.

Subject – Social Science

Note: Do the holiday homework in separate notebook.

Q1. Read the following case carefully and answer the following questions

that follows:

In the beginning, the Earth was almost lifeless. During the prehistoric period, life was primitive. People lived in caves and were hunter gathers. Early humans wore animal hides for clothes and used stone tools for hunting. This period is called the Stone Age and is marked by the use of stone tools and weapons.

Q(i) Name the three periods into which the Stone Age is divided.

Q(ii) What is the another name for 'the thinking man'?

Q(iii) Name the earliest settlement belonging to the Chalcolithic Age.

Q(iv) What was the life like during the Prehistoric period?

Q2. Read the following source carefully and answer the following questions that follows; Since ancient times, human beings have gazed at the dark sky and wondered about all the shining objects. All the objects that exist in the sky are called celestial bodies. Stars are huge celestial bodies. The sun , the eight planets , their moons, the asteroids and comets form the solar system.

Q(i) Name the eight planets of the solar system.

Q(ii) What are asteroids made up of ?

Q(iii) What is the other name given to these asteroids?

Q(iv) ___ appears as beautiful shining bodies with long tails in the sky.

Q3.What are the advantages of using EVM (Electronic Voting Machine) in elections?

Q4. Write L for the literary sources and A for the archaeological sources.

1. Biographies
2. Monuments
3. Coins
4. Manuscripts
5. Inscriptions
6. Traveller's accounts

Q5. Identify whether the following statements are examples of prejudice or stereotype.

(i) Sahil has been advised by his parents not to eat with Rohit who belongs to different caste.

(ii) People of northern India are bold and outgoing.

(iii) Nobody talks to Rahul as he is dark.

Q6. (a) Write all the States along with their capitals in notebook.

(b) On an outline Political map of India mark and label:

Indian States and their capital and colour each one of them with different pencil colours.

Q7. Design a poster on A3 size sheet and write a slogan in order to create awareness regarding "Need of Recycling Papers."

Q8. Find out about how the tradition of kite flying became a part of India's culture .

Science

Q 1.A herbarium is a collection of preserved preserved leaf of plant specimens and data four scientific study. Prepare your herbarium file. Collect different type of leaves from a

nearby park. Put these leaves in a newspaper. Place a heavy book on the newspaper. Leave it undisturbed. Remove the book after a week. You will find the leaves have dried up. Paste the leaves on an A4 size paper and write the name of the plant below each leaf to which it belongs and what type of leaf venation?

Q 2. How do eating pizzas and burgers affect the environment ?

Q 3. Visit a near by park. Collect any five flowers. Observe them closely and study the parts of the flower and make a chart of the parts of the flower.

Q 4. Carbon dioxide is exhaled during breathing. Describe the statement with the help of activity.

Q 5. Collect information about aquatic terrestrial and desert plant and their adaptive features. Prepare a file with the help of pictures and information.

Q 6. Name the type of motion. Draw the diagram of all motion with the help of example.

Q7. Draw creative poster with a slogan to raise awareness about the advantages of millets emphasizing the nutritional value of millet .

French

Q1 Make a scrap file to show the followings about France .

- A) Monuments de la France . (Any 2)
- B) Les fromages français . (Any 2)
- C) Napoléon Bonaparte .
- D) Le tour de France .
- E) Les parfums français. (any 2)
- F) France president .

Note: Question 2,3,4 homework needs to be done in French notebook .

Q2 Traduisez en français - Translate in French .

- 1) Good morning , Sir !
- 2) Good afternoon , mam !
- 3) Hello , how are you ?
- 4) Good evening !
- 5) See you again !
- 6) See you soon !
- 7) Thankyou very much !

- 8) Please !
- 9) Happy birthday !
- 10) Happy journey !
- 11) I am fine , thankyou !
- 12) Sorry !

Q3 Répondez en français - Reply in french

- A) Comment vous appelez - vous ?
- B) Comment ça va ?
- C) Où habitez - vous ?
- D) Quel âge as-tu ?

Q4 Présentez - vous en Cinq phrases .
Introduce yourself in five sentences .

Computer

Q1. Prepare a A3 Size chart on uses of excel.

Q2. How Artificial Intelligence makes one life comfortable? Also mention disadvantages of it on an A3 size sheet.

Q3. Create a short story on cyber Ethics

Q4. Write down your ideas on A4 size sheet, how will you make your school smart using smart devices.

Q5. Design E-Greeting card by adding video, audio, animations etc.

ART

Do the given pages in drawing file.

- Book Page no. 27 (Flower lily)
- Book Page no. 29 (Different types of trees)

Make any traditional art on A4 size white sheet

Eg – Gond art , Madhubani art , Warli art etc .