

Holiday Homework

CLASS -III

SUBJECT: ENGLISH

1) Do practice of cursive writing one page everyday (coursebook)

2) Make sentences with the following words

a) Suddenly b) Famous c) Dangerous d) Floating e) Mixture f) Musicians
g) Beautiful h) Pricked

3) Write the proper nouns for the following common noun.

a) Toothpaste: Colgate, _____, _____, _____

b) Ice-cream: Amul, _____, _____, _____

4) Write common noun for the given proper nouns.

a) New York, Delhi, Nagpur: _____

b) Mahabharat, Bible, Bhagwad Geeta : _____

5) The theme of G20 presidency is "One earth one family one future".

Write a paragraph writing on "How do you expect your future India"?

हिंदी

1. 20 पेज सुलेख लिखो। (सुलेख पुस्तक में करें)
2. वसुधैव कुटुंबकम् पर एक सुंदर सा चित्र बनाकर स्लोगन लिखे।
3. हमारे देश के वर्तमान प्रधानमंत्री, उपराष्ट्रपति, प्रधानमंत्री, उप राज्यपाल, मुख्यमंत्री और शिक्षा मंत्री के पूरे नाम की जानकारी प्राप्त करें। उनकी तस्वीरें A4 रंगीन शीट पर चिपकाए और नाम लिखें।
4. अपने मित्र के लिए जन्मदिन की ढेरों बधाइयाँ देते हुए एक सुंदर कार्ड बनाओ और उसमें रंग भरें।


Subject : EVS

- 1) What are the benefits of playing outdoor games .List/paste any 5 outdoor games in A3 size sheets which you used to play with your friends. Write the rules of playing them.
- 2) What first aid should be given when an insect bites you. List the points in A4 size sheets.
- 3) The theme of G20 presidency is "One earth one family one future". Under which many environmental issues were raised.
 - a) Write 5 ways to save our environment.
 - b) Make a poster on "say no to single use plastic"


SUBJECT- MATHEMATICS

Q1.The theme of India's G20 Presidency - "Vasudhaiva Kutumbakam" or "One Earth · One Family · One Future". In Mathematics, a family can be defined as a collection of math facts that express the relation between the set of numbers. It helps to understand basic arithmetic operations(addition,subtraction,multiplication and division) and solvetheir problems.


Complete Each Family of Facts

1) 


$\square + \square = \square$
 $\square + \square = \square$
 $\square - \square = \square$
 $\square - \square = \square$

4) 


$\square + \square = \square$
 $\square + \square = \square$
 $\square - \square = \square$
 $\square - \square = \square$

2) 


$\square + \square = \square$
 $\square + \square = \square$
 $\square - \square = \square$
 $\square - \square = \square$

5) 

$\square + \square = \square$
 $\square + \square = \square$
 $\square - \square = \square$
 $\square - \square = \square$

3) 

$\square + \square = \square$
 $\square + \square = \square$
 $\square - \square = \square$
 $\square - \square = \square$

6) 

$\square + \square = \square$
 $\square + \square = \square$
 $\square - \square = \square$
 $\square - \square = \square$

Q2. The cost of G20 security for hosting G20 summit of some countries are given below in the table.

Round off the costs of Toronto and Hamburg to the nearest 100.

G20 COUNTRIES	SECURITY COST(US \$)
TORONTO	575
BRISBANE	100
HAMBURG	140
BUENO AIRES	112

WORKSHEET

Q1. Find the place value and face value of the given numbers-

- a) 1309
- b) 9486

Q2. Write the number name of the following-

- a) 6384
- b) 1479

Q3. Write the numerals for the following-

- a) Three thousand four hundred one
- b) Seven thousand three hundred fifty

Q4. Write the expanded form of the following-

- a) 4381
- b) 7095

Q5. Write the short form-

- a) 8 thousands + 3 hundreds + 5 tens + 0 ones
- b) 6 thousands + 0 hundreds + 2 tens + 5 ones

Q6. Write before, after and between numbers of the following-

- a) _____ 6001
- b) 1626 _____ 1628

c) 5969 _____

Q7. Round off the numbers to the nearest 10 and 100.

a) 148

b) 678

Q8. Add the 3-digit numbers 254 + 625

Q9. Add the 4-digit numbers 1726 + 7253

Q10. Add the 3 digit numbers with carry forward 763 + 309

Q11. Add the 4-digit numbers with carry forward 7351 + 1928

Q12. Subtract the 3 digit numbers 700 – 465

Q13. Subtract the 4-digit numbers 2329 – 1246

Q14. Count the numbers in 10's

a) 145 _____, _____, _____, _____

b) 3269 _____, _____, _____, _____

Q15. Write the greatest and smallest 4 digit number.

Q16. Circle the greatest number –

3097, 1218, 5406, 2108, 7622

Q17. Arrange the numbers in ascending order-

5259, 1516, 9095, 2840, 4066

Q18. Count the numbers in 100's

1. 5240 _____, _____, _____, _____

2. 1362 _____, _____, _____, _____

Q19. A library has 1562 English novels and 1322 Hindi novels. Find the total number of novels.

Q20. Ram wants to buy a car toy cost Rs. 525. He only has Rs. 200 with him. How much more money he needs?

Subject: Computer

Q.1 On a A3 size sheet draw the pictures of storage devices and write their uses .

Subject: Art

These pages you have to do in your Art book.

Book Page no.18 (Butterfly)

Book Page no.20 (Green Tree)

Book Page no.21 (Mischievous mouse)

Book Page no.25 (Feather Crown)

Book Page no.30 (Dinosaur)